

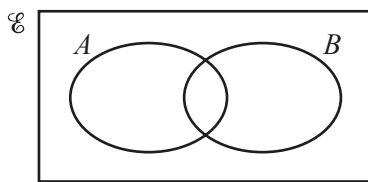
- 1 A concert hall has 1540 seats.

Calculate the number of people in the hall when 55% of the seats are occupied.

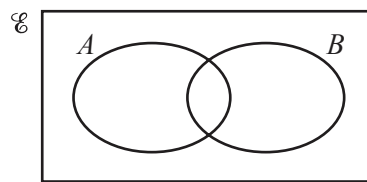
For
Examiner's
Use

Answer [1]

- 2 Shade the required region on each Venn diagram.



$A \cup B'$



$(A \cap B)'$

[2]

- 3 Calculate $81^{0.25} \div 4^{-2}$.

Answer [2]

- 4 (a) Find m when $4^m \times 4^2 = 4^{12}$.

Answer(a) $m =$ [1]

- (b) Find p when $6^p \div 6^5 = \sqrt{6}$.

Answer(b) $p =$ [1]

5 A hummingbird beats its wings 24 times per second.

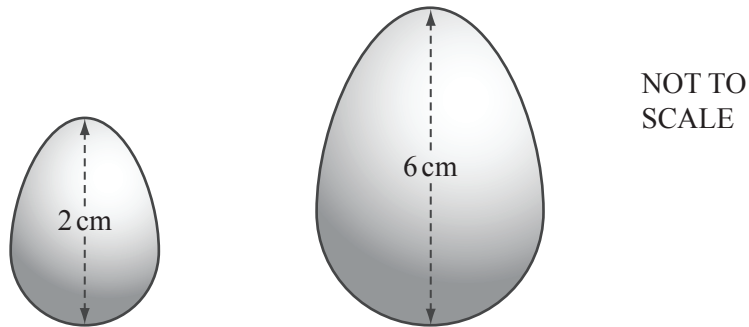
(a) Calculate the number of times the hummingbird beats its wings in one hour.

Answer(a) [1]

(b) Write your answer to **part (a)** in standard form.

Answer(b) [1]

6



A company makes solid chocolate eggs and their shapes are mathematically similar.

The diagram shows eggs of height 2 cm and 6 cm.

The mass of the small egg is 4 g.

Calculate the mass of the large egg.

Answer g [2]

7 Find the length of the straight line from $Q(-8, 1)$ to $R(4, 6)$.

Answer $QR =$ [3]

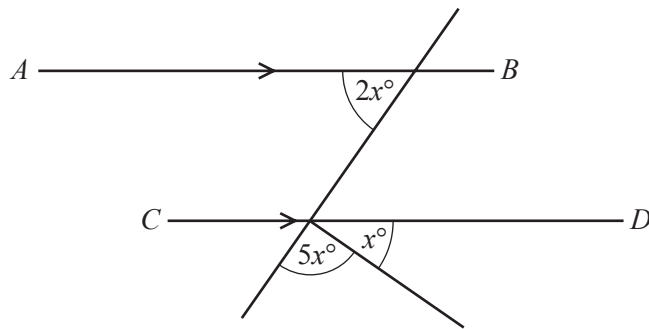
- 8 Calculate the radius of a sphere with volume 1260 cm^3 .

[The volume, V , of a sphere with radius r is $V = \frac{4}{3}\pi r^3$.]

For
Examiner's
Use

Answer cm [3]

9



NOT TO
SCALE

AB is parallel to CD .
Calculate the value of x .

Answer $x =$ [3]

- 10 Solve the simultaneous equations.

$$\begin{aligned} 3x + y &= 30 \\ 2x - 3y &= 53 \end{aligned}$$

Answer $x =$

$y =$ [3]

- 11 A rectangular photograph measures 23.3 cm by 19.7 cm, each correct to 1 decimal place.
Calculate the lower bound for

For
Examiner's
Use

- (a) the perimeter,

Answer(a) cm [2]

- (b) the area.

Answer(b) cm² [1]

- 12 A train leaves Barcelona at 21 28 and takes 10 hours and 33 minutes to reach Paris.

- (a) Calculate the time the next day when the train arrives in Paris.

Answer(a) [1]

- (b) The distance from Barcelona to Paris is 827 km.

Calculate the average speed of the train in kilometres per hour.

Answer(b) km/h [3]

13 The scale on a map is 1: 20 000.

- (a) Calculate the actual distance between two points which are 2.7 cm apart on the map.
Give your answer in kilometres.

Answer(a) km [2]

- (b) A field has an area of $64\,400\text{ m}^2$.
Calculate the area of the field on the map in cm^2 .

Answer(b) cm^2 [2]

- 14 Solve the equation $2x^2 + 3x - 6 = 0$.
Show all your working and give your answers correct to 2 decimal places.

Answer $x =$ or $x =$ [4]

*For
Examiner's
Use*

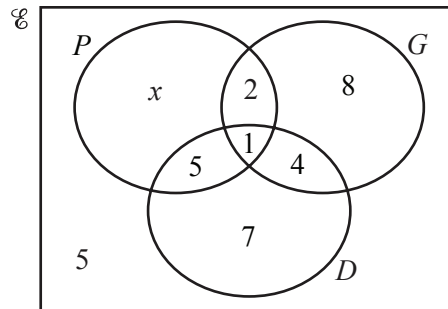
- 15 A teacher asks 36 students which musical instruments they play.

$$P = \{\text{students who play the piano}\}$$

$$G = \{\text{students who play the guitar}\}$$

$$D = \{\text{students who play the drums}\}$$

The Venn diagram shows the results.



- (a) Find the value of x .

Answer(a) $x =$ [1]

- (b) A student is chosen at random.

Find the probability that this student

- (i) plays the drums but **not** the guitar,

Answer(b)(i) [1]

- (ii) plays only 2 different instruments.

Answer(b)(ii) [1]

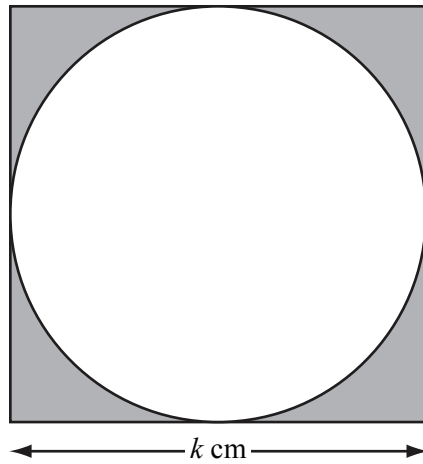
- (c) A student is chosen at random from those who play the guitar.

Find the probability that this student plays no other instrument.

Answer(c) [1]

For
Examiner's
Use

16



The diagram shows a square of side k cm.

The circle inside the square touches all four sides of the square.

(a) The shaded area is A cm².

Show that $4A = 4k^2 - \pi k^2$.

Answer (a)

[2]

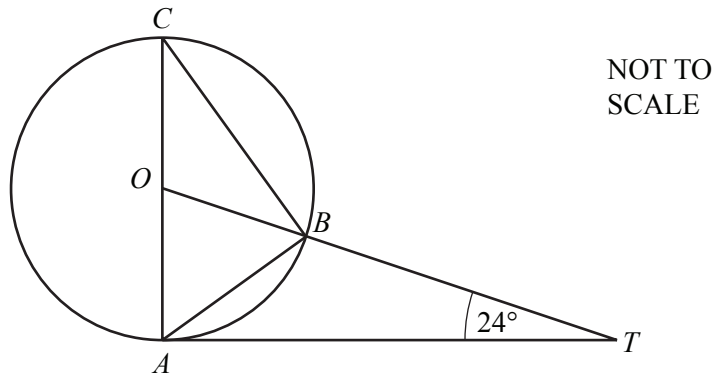
(b) Make k the subject of the formula $4A = 4k^2 - \pi k^2$.

Answer(b) $k =$

[3]

*For
Examiner's
Use*

17



For
Examiner's
Use

A , B and C are points on a circle, centre O .
 TA is a tangent to the circle at A and OBT is a straight line.
 AC is a diameter and angle $OTA = 24^\circ$.

Calculate

(a) angle AOT ,

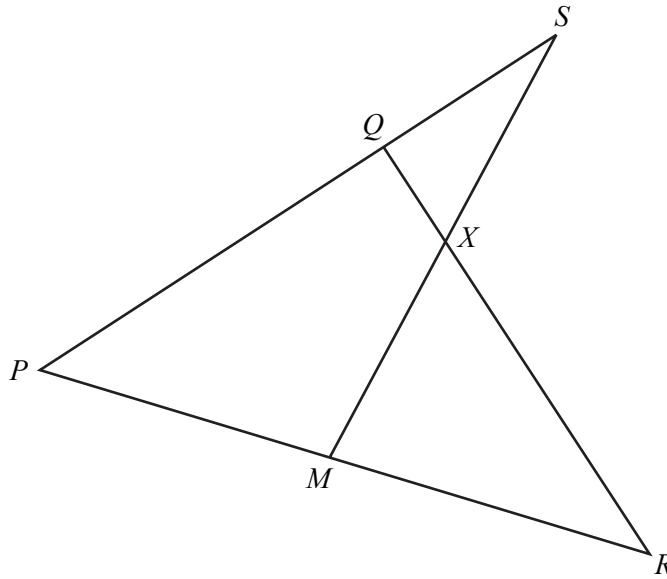
Answer(a) Angle $AOT =$ [2]

(b) angle ACB ,

Answer(b) Angle $ACB =$ [1]

(c) angle ABT .

Answer(c) Angle $ABT =$ [2]



NOT TO
SCALE

In the diagram, PQS , PMR , MXS and QXR are straight lines.

$PQ = 2 QS$.

M is the midpoint of PR .

$QX : XR = 1 : 3$.

$\vec{PQ} = \mathbf{q}$ and $\vec{PR} = \mathbf{r}$.

(a) Find, in terms of \mathbf{q} and \mathbf{r} ,

(i) \vec{RQ} ,

Answer(a)(i) $\vec{RQ} = \dots\dots\dots$ [1]

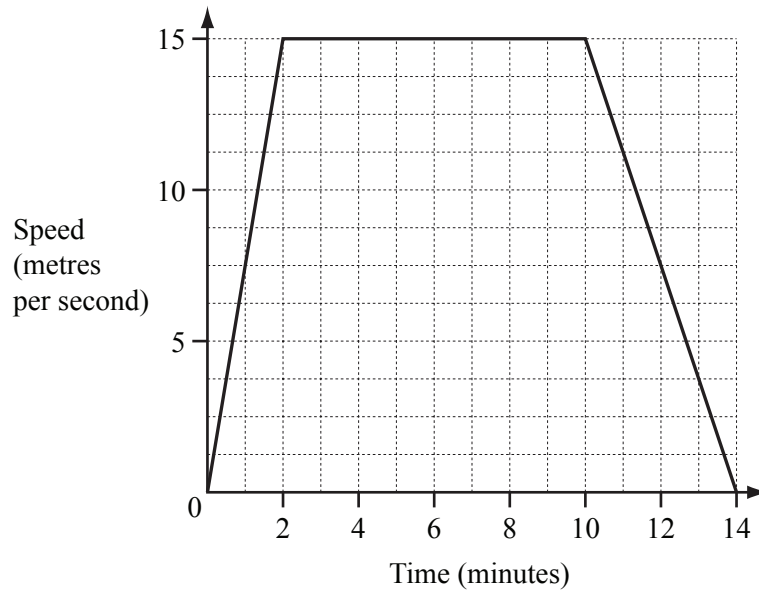
(ii) \vec{MS} .

Answer(a)(ii) $\vec{MS} = \dots\dots\dots$ [1]

(b) By finding \vec{MX} , show that X is the midpoint of MS .

Answer (b)

[3]



The diagram shows the speed-time graph of a train journey between two stations. The train accelerates for two minutes, travels at a constant maximum speed, then slows to a stop.

- (a) Write down the number of **seconds** that the train travels at its constant maximum speed.

Answer(a) s [1]

- (b) Calculate the distance between the two stations **in metres**.

Answer(b) m [3]

- (c) Find the acceleration of the train in the **first two minutes**.
Give your answer in m/s^2 .

Answer(c) m/s^2 [2]

Question 20 is printed on the next page.

20 $f(x) = x^3$ $g(x) = 2x - 3$

(a) Find

(i) $g(6)$,

Answer(a)(i) [1]

(ii) $f(2x)$.

Answer(a)(ii) [1]

(b) Solve $fg(x) = 125$.

Answer(b) $x =$ [3]

(c) Find the inverse function $g^{-1}(x)$.

Answer(c) $g^{-1}(x) =$ [2]

Permission to reproduce items where third-party owned material protected by copyright is included has been sought and cleared where possible. Every reasonable effort has been made by the publisher (UCLES) to trace copyright holders, but if any items requiring clearance have unwittingly been included, the publisher will be pleased to make amends at the earliest possible opportunity.

University of Cambridge International Examinations is part of the Cambridge Assessment Group. Cambridge Assessment is the brand name of University of Cambridge Local Examinations Syndicate (UCLES), which is itself a department of the University of Cambridge.